


Kk Kk Kk Kk Kk Kk Kk

Kk

Gg Gg Gg Gg Gg Gg Gg

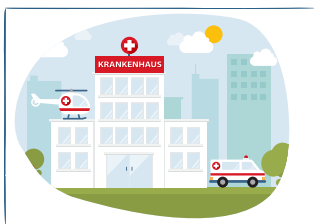
Gg




Du bist klug.

Gib mir den Krug.


Wir sehen.




G K



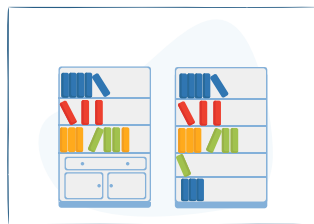
G K



G K




g k

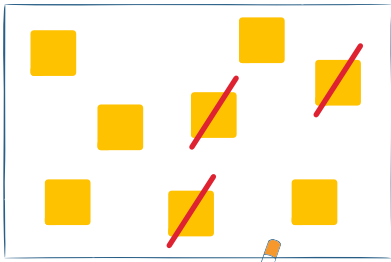


g k

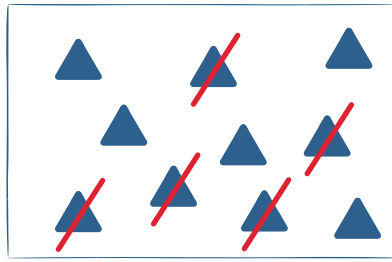


g k

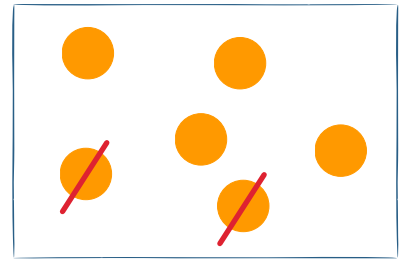




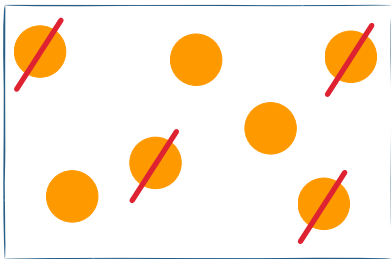
$$8 - \square = \square$$



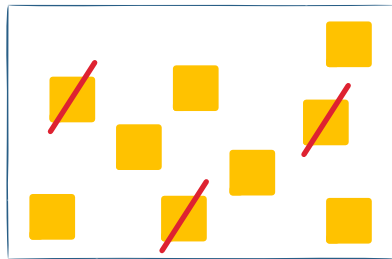
$$10 - \square = \square$$



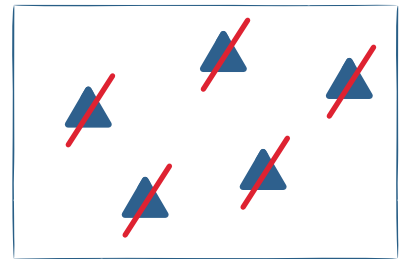
$$\square - \square = \square$$



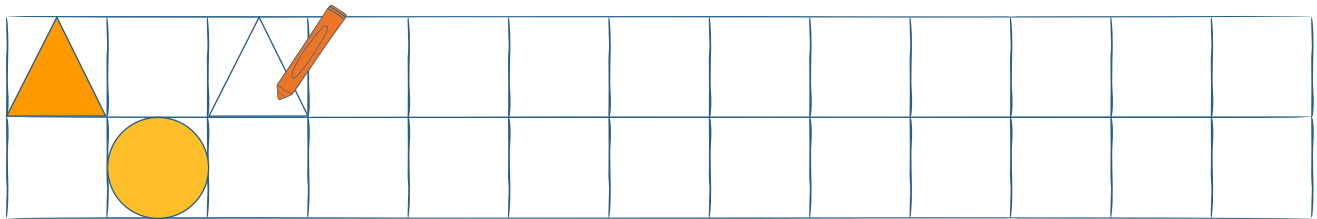
$$\square - \square = \square$$



$$\square - \square = \square$$



$$\square - \square = \square$$



$$10 - 7 = \underline{\quad}$$



$$9 - 6 = \underline{\quad}$$



$$5 - 3 = \underline{\quad}$$



$$6 - 4 = \underline{\quad}$$



$$4 - 3 = \underline{\quad}$$



$$9 - 4 = \underline{\quad}$$



Sch Sch Sch Sch Sch Sch




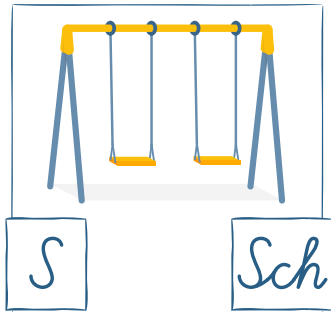


Sch

sch sch sch sch sch sch sch

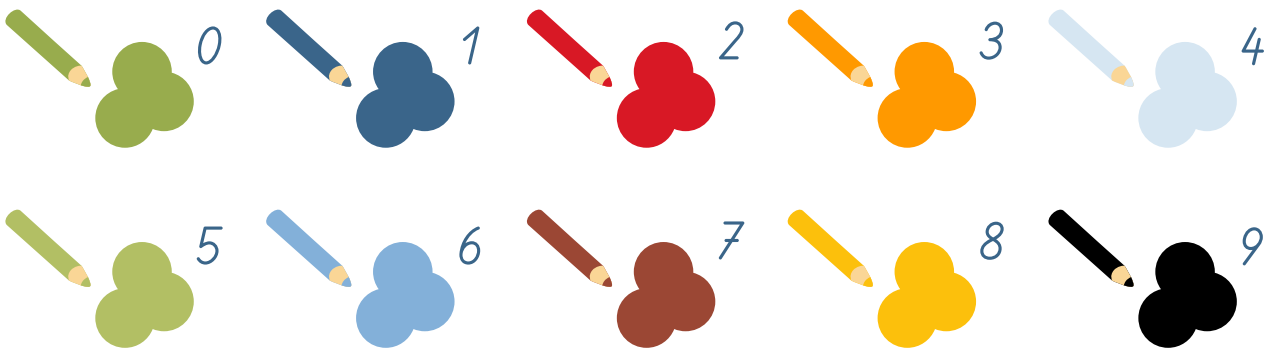

sch



schön



gulosch kulosch gufosch kulosch
selasch kolosch kulosch fukosch






Bera**A** fliegt mit dem Flugzeug in den Urlaub.



Taisiia baut mit ihrem Bruder am Strand eine Sandburg.



Am Ferienende gibt es oft Stau, weil alle zurückfahren.



Milana besucht ihre Oma auf einer Alm mitten in den Bergen.

Was stimmt? Kreuze an!

wahr | falsch

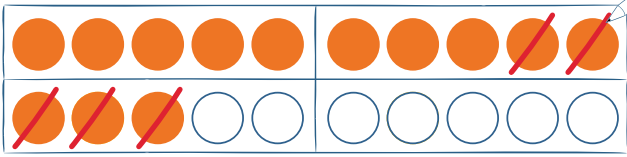
Bera**A** fährt mit dem Zug in den Urlaub.

<input type="checkbox"/>	<input type="checkbox"/>
<input type="checkbox"/>	<input type="checkbox"/>
<input type="checkbox"/>	<input type="checkbox"/>
<input type="checkbox"/>	<input type="checkbox"/>

Taisiia baut eine Sandburg am Strand.

Am Ferienende fahren viele zurück.

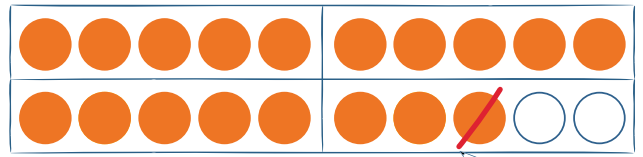
Milana besucht ihre Oma am Bauernhof.



$$13 - 5 = \underline{\quad}$$

$$13 - 3 = 10$$

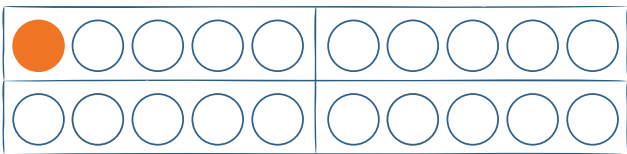
$$10 - \underline{\quad} = \underline{\quad}$$



$$18 - 9 = \underline{\quad}$$

$$18 - \underline{\quad} = 10$$

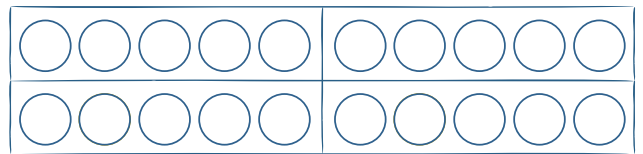
$$10 - \underline{\quad} = \underline{\quad}$$



$$15 - 7 = \underline{\quad}$$

$$15 - \underline{\quad} = \underline{\quad}$$

$$10 - \underline{\quad} = \underline{\quad}$$



$$12 - 3 = \underline{\quad}$$

$$12 - \underline{\quad} = \underline{\quad}$$

$$\underline{\quad} - \underline{\quad} = \underline{\quad}$$

$$5 + 5 + \underline{\quad} = \underline{\quad}$$

10

$$4 + \underline{\quad} + \underline{\quad} = \underline{\quad}$$

10

$$8 + \underline{\quad} + \underline{\quad} = \underline{\quad}$$

10

$$15 - 5 - \underline{\quad} = \underline{\quad}$$

10

$$16 - \underline{\quad} - \underline{\quad} = \underline{\quad}$$

10

$$13 - \underline{\quad} - \underline{\quad} = \underline{\quad}$$

10