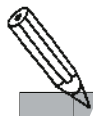



1 Zähle, male, kreise ein.



1	2	3	4	5	6	7	8	9	10
---	---	---	---	---	---	---	---	---	----

4	5	6	7
---	---	---	---



1	2	3	4	5	6	7	8	9	10
---	---	---	---	---	---	---	---	---	----

7	8	9	10
---	---	---	----

2 Zähle, male, kreise ein.



1	2	3	4	5	6	7	8	9	10
---	---	---	---	---	---	---	---	---	----

1	2	3	4
---	---	---	---



1	2	3	4	5	6	7	8	9	10
---	---	---	---	---	---	---	---	---	----

6	7	8	9
---	---	---	---



1	2	3	4	5	6	7	8	9	10
---	---	---	---	---	---	---	---	---	----

7	8	9	10
---	---	---	----



1	2	3	4	5	6	7	8	9	10
---	---	---	---	---	---	---	---	---	----



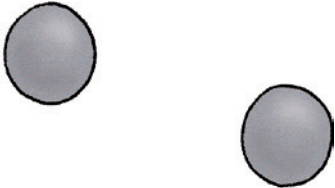



3	4	5	6
---	---	---	---



Teil A



1 Mengen bis 5 zählen – Kreise die richtige Anzahl ein.

		
1 2 3 4 5	1 2 3 4 5	1 2 3 4 5
		
1 2 3 4 5	1 2 3 4 5	1 2 3 4 5





2 Mengen bis 5 zählen – Zeichne die richtige Anzahl.

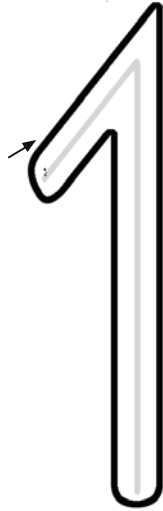
<p>5</p>	<p>3</p>	<p>5</p>
<p>4</p>	<p>2</p>	<p>3</p>





1 Immer 1

eins



2 Schreibe.

1	1	
---	---	--

1	1		
---	---	--	--

1	1				
---	---	--	--	--	--

1	1						
---	---	--	--	--	--	--	--

1	1							
---	---	--	--	--	--	--	--	--





1 Immer 2



2 Schreibe.

2	2	
---	---	--

2	2		
---	---	--	--

2	2				
---	---	--	--	--	--

2	2							
---	---	--	--	--	--	--	--	--



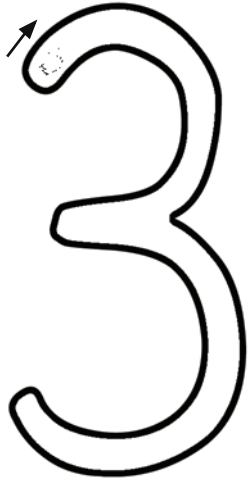
2	2								
---	---	--	--	--	--	--	--	--	--

Teil A



1 Immer 3

drei



2 Schreibe.

3	3	
---	---	--

3	3		
---	---	--	--

3	3				
---	---	--	--	--	--

3	3						
---	---	--	--	--	--	--	--

3	3								
---	---	--	--	--	--	--	--	--	--





1 Schreibe.

1		2		3		1		2		3	
		2		3							
3		2		1		3		2		1	
3											

